

AZAAN INTERNATIONAL SCHOOL

Worksheet (2024-2025)

Grade-III

Subject: Computer Science

Name: _____ Roll No: _____ Sec: _____

Chapters: 1. Know Your Computer,
2. Learn To Use MS Windows 10
3. Paint 3D.

I. Fill in the blanks

1. Software is a set of _____.
2. A computer has two parts: _____ & _____
3. An _____ is the part of the system software.
4. _____ displays the current time & date.
5. _____ is a program that displays moving pictures.
6. An _____ is a small picture that is used to open a program, file & folder.
7. To see a 2D shape in 3D, rotate the _____.
8. _____ is the next version of MS Paint.
9. A 3D shape has length, breadth & _____.
10. _____ are used to save your work.

II. Choose the correct option.

1. We can touch & feel the _____ ()
(a) System software (b) Application Software (c) Hardware
2. The software used to do sums like a _____ of a computer. ()
(a) manager (b) teacher (c) student
3. IPO cycle means _____ ()
(a) giving information, processing done by a computer and showing output
(b) giving raw data, processing done by a computer and getting information is output
(c) giving results, processing done by a computer and generating information is output
4. Which one of the following is **not** an example of operating system? ()
(a) Windows 10 (b) Unix (c) Icons
5. Small pictures on desktop are called _____ ()
(a) icons (b) pictures (c) screen
6. Preeti works on many applications on her computer. She clicks on the taskbar. All the opened Windows minimizes. Which button did Preeti clicked? ()
(a) Start button (b) Show Desktop button (c) Start menu

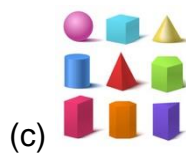
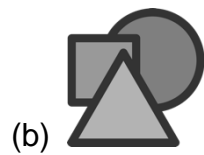
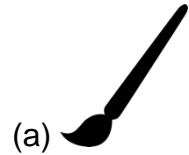
6. Which one of the following is used to change desktop background? ()

- (a) Refresh (b) New (c) Personalize

7. The text tool allows you to type _____ text. ()

- (a) 2D (b) Paint (c) Square

8. Which of the following shows different types of brushes? ()



9. Close button is present on _____ ()

- (a) menu (b) title bar (c) toolbar

10. Karan draws a square. He wants to change its 2D shape to 3D. Which button will Karan click? ()

- (a) Show 3D (b) Make 3D (c) Convert 3D

III. Write the statements as (T) for True and (F) for False.

1. A playing dice is an example of a 3D shape. { }
2. You write only black colour text in Paint 3D. { }
3. Menu option has the Save option in it. { }
4. MS Windows is a system software. { }
5. A computer arranges icons itself if the auto arrange option is selected. { }
6. Screen saver works even if you are working on the system. { }
7. Pen Drive is an input device. { }
8. Tux paint is used to draw and paint only. { }
9. A computer has three parts. { }
10. When we start Paint 3D, it displays two options. { }

V. Very Short Answer Questions.

1. Name any two operating systems.

Ans _____

2. What is displayed when Screen saver starts?

Ans _____

3. What are the two types of computer software?

Ans _____


4. Name any two software present in your computer lab?

Ans _____

5. Define Canvas.

Ans _____

VIII. Circle the odd one out & give a reason for your answer.



1. _____



2. _____

***** **Best of Luck*******